

DAV PUBLIC SCHOOL

Patliputra Colony , Patna 13

Holiday Assignment

The cover features a central yellow rectangular area with the text 'Summer Vacation' in blue. This area is framed by a blue border decorated with various summer-themed icons: a yellow school bus, a globe, a yellow suitcase, a coconut, a beach ball, a red and white beach umbrella, a yellow hat, and a red flag. The entire page is surrounded by a decorative floral border with pink and purple flowers and green leaves. Two palm trees are positioned at the top corners of the central area.

Summer Vacation

Name- _____

Class- _____

Sec- _____

Roll no - _____

About Me

My name is _____.

My birthday is in _____.

I am _____ years old.

I am a _____.(boy/girl)

I am studying in _____ school.

I am studying in _____ grade/class.

My favorite fruit is _____.

My favorite vegetable is _____.

My favorite color is _____.

My best friend's name is _____.

My favorite subject is _____.

My hobbies are _____.

















I want to become a _____.



THIS OR THAT



COMPLETE

- _____ is a  
- _____ is a  
- _____ is a  
- _____ is a  
- _____ is a  
- _____ is a  
- _____ is a  
- _____ is a  

Opposite words

Match the opposite words.



Big •

• Short



Tall •

• Cold



Up •

• Out



Hot •

• Small



New •

• Girl



In •

• Down



Boy •

• Many

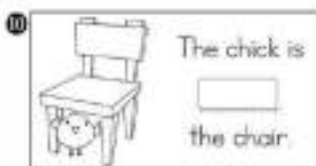


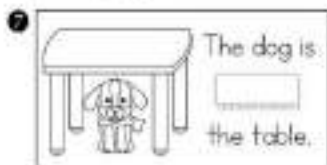
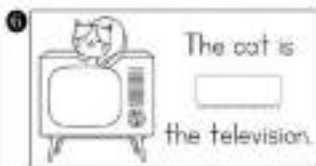

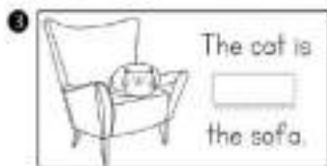

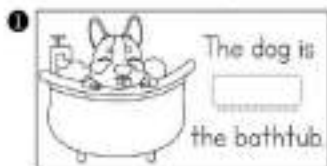


Few •

• Old



Fill in the blanks using:- in, on , under



English worksheet

Write the rhyming words.

' ee ' Sound words	' oo ' Sound words	' ll ' sound words
Jeep	Fool	Tall
<hr/> <hr/> <hr/> <hr/> <hr/> <hr/> <hr/> <hr/>	<hr/> <hr/> <hr/> <hr/> <hr/> <hr/> <hr/> <hr/>	<hr/> <hr/> <hr/> <hr/> <hr/> <hr/> <hr/> <hr/>

मेरा परिचय

1. मेरा नाम _____ है।
2. मैं _____ साल का हूँ।
3. मैं _____ कक्षा में पढ़ता हूँ।
4. मैं _____ में रहता हूँ।
5. मेरे पिताजी का नाम श्रीमान _____ है।
6. मेरी माताजी का नाम श्रीमती _____ है।
7. मुझे _____ बहुत पसंद है।
8. मैं बड़ा होकर _____ बनना चाहता हूँ।

WORKSHEET -
VARNAMALA (वर्णमाला)

I. खाली जगह भरो। (स्वर)

_____ आ _____ ई _____ ऊ _____

ए _____ ओ _____

II. खाली जगह भरो। (व्यंजन)

_____ ख _____ ड

च _____ ज

_____ ण

त _____ न

_____ ब _____ म

य _____

श _____

क्ष _____



WORKSHEET

NAME - _____

DATE - _____

इन शब्दों को भी पढ़िए -

कटी	फटी	बटी	हटी	सटी	डटी	
अभी	कभी	तभी	कमी	जमी	थमी	नमी
डरी	दरी	परी	भरी	हरी		
भली	चली	कली	फली	नली		
कही	दही	मही	सही			
खड़ी	घड़ी	पड़ी	छड़ी	बड़ी		
तीन	बीस	तीस	टीस	कील	चील	शील
खीर	नीर	वीर	नीला	गीला	पीला	लीला
रानी	पानी	नानी	ज्ञानी	दादी	आधी	सादी

* ई * की (ी) मात्रा लगाइए व उच्चारण भी किजिए -

क + ी = की
ख + ी =
ग + ी =
घ + ी =

च + ी =
छ + ी =
ज + ी =
झ + ी =

ट + ी =
ठ + ी =
... + ी =
... + ी =

WORKSHEET

NAME - _____

DATE - ____/____/____

इन शब्दों को भी पढ़िए -

तिल मिल विल हिल खिल
 दिन गिन बिन रवि छवि कवि
 किला खिला पिला मिला हिला सिला
 किताब गिलास किन्दाड़ सियार डलिया तकिया
 हिसाब बिखर मिनट टिकट निकट
 माघिस मालिश साजिश बारिश अखिल जटिल
 सविता विशाल विकास किसान विरान
 बलिदान हिमालय रविवार शनिवार गिरगिट

'इ' की (ि) मात्रा लगाइए व उच्चारण भी किजिए -

क + ि = कि

ख + ि =

ग + ि =

घ + ि =

च + ि =

छ + ि =

ज + ि =

झ + ि =

ट + ि =

ठ + ि =

ड + ि =

ण + ि =

Teacher's Sign _____

नीचे दिए गए चित्र को पहचानकर खाली स्थान में उत्तर लिखिए और चित्र में रंग भरिए :-

छाया
शुद्ध
पेड़
फल
मित्र



1. यह एक है ।
2. पेड़ हमें देता है ।
3. यह हवा को करता है ।
4. पेड़ों से हमें तरह-तरह के मिलते हैं ।
5. पेड़ हमारे हैं ।

प्यासा कौआ

घड़ा , पानी, कौआ, कंकड़, खुश

एक बहुत प्यासा (1) _____ था। उसे एक (2)
_____ दिखाई दिया। घड़े में (3) _____ बहुत कम
था। कौए ने उसमें छोटे-छोटे (4) _____ डाले। पानी ऊपर
आ गया। कौआ पानी पीकर (5) _____ हो गया।

चित्र में रंग भरो ।



PRACTICE WORKSHEET

Name: _____ Roll no: _____

Class: _____ Date: _____

ASCENDING AND DESCENDING ORDER

1 Arrange the numbers in ascending order.

179, 198, 154, 160, 6

--	--	--	--	--

88, 148, 28, 118, 180

--	--	--	--	--

20, 126, 62, 169, 46

--	--	--	--	--

52, 75, 39, 40, 19

--	--	--	--	--

2 Arrange the numbers in descending order.



194 45 82 170 117

--	--	--	--	--



49 174 25 162 54

--	--	--	--	--

119 29 82 160 99

--	--	--	--	--

168 42 24 190 72

--	--	--	--	--



2-Digit Addition Without Regrouping

Find the sum.

Tens	Ones
6	4
+ 2	3

Tens	Ones
3	7
+ 6	0

Tens	Ones
2	4
+ 3	1

Tens	Ones
1	0
+ 6	7

Tens	Ones
1	3
+ 5	3

Tens	Ones
	2
+ 9	3

Tens	Ones
3	1
+ 1	0

Tens	Ones
7	8
+ 1	1

Tens	Ones
9	5
+	1

2-Digit Subtraction Without Regrouping

Find the difference.

Tens	Ones
5	4
- 2	1

Tens	Ones
6	8
- 4	0

Tens	Ones
7	2
- 4	1

Tens	Ones
8	7
- 3	1

Tens	Ones
4	5
- 2	3

Tens	Ones
1	3
-	3

Tens	Ones
3	6
- 1	5

Tens	Ones
8	7
- 1	1

Tens	Ones
4	8
- 3	7

Name _____ Date _____

8



Look at the number. Fill in the blanks with the correct tens and ones.

24 _____ Tens + _____ Ones**18** _____ Tens + _____ Ones**53** _____ Tens + _____ Ones**47** _____ Tens + _____ Ones**32** _____ Tens + _____ Ones**7** _____ Tens + _____ Ones**12** _____ Tens + _____ Ones**29** _____ Tens + _____ Ones**35** _____ Tens + _____ Ones**41** _____ Tens + _____ Ones

Comparing Numbers

Name: 

Christopher Crocodile is hungry. He always wants to eat the greatest number.

15  32 and 67  41

Use these symbols to compare the following numbers.

< is less than **>** is greater than

27 ○ 84	45 ○ 78	62 ○ 39
55 ○ 29	72 ○ 92	49 ○ 50
20 ○ 28	43 ○ 90	37 ○ 39
53 ○ 33	72 ○ 44	54 ○ 72
34 ○ 29	63 ○ 80	40 ○ 24

Before & After

Write the before number.

	23
--	----

	19
--	----

	77
--	----

	51
--	----

	75
--	----

	52
--	----

	69
--	----

	37
--	----

	70
--	----

	44
--	----

	42
--	----

	66
--	----

	15
--	----

	30
--	----

	89
--	----

Write the after number.

18	
----	--

33	
----	--

13	
----	--

23	
----	--

48	
----	--

55	
----	--

10	
----	--

34	
----	--

62	
----	--

26	
----	--

87	
----	--

72	
----	--

31	
----	--

95	
----	--

92	
----	--

Name: _____

Topic: Parts of body

Q. Label the parts of body from the word bank.

head, nose, arm, eye, ears, leg, foot, hand



5 Senses



I use my _____ to see.

I use my _____ to smell.

_____ are used to hear sounds.








My _____ can touch things.

I use my _____ to taste.

MEALS

1. This is what Ishani will eat today. Help her to write the names of the foods next to the pictures. Use the word box to help.

Cereal Pasta Soup Rice Chicken Eggs Salad Cheese

Breakfast	Lunch	Dinner
		
		
		

1. Complete the sentences by writing the correct meal.

- 1 – Ishani has soup for breakfast.
- 2 – She has chicken for _____.
- 3 – She has rice for _____.
- 4 – She has cheese for _____.
- 5 – She has salad for _____.

Ishani



TOPIC – Keeping Clean

Fill in the blanks with the help of picture clues and help box:

Tooth Brush	Soap	Hanky	Water
Tooth Paste	Towel	Nail- cutter	Comb

1. we use _____
to clean our body.



and _____



2. we use _____



to cut short our nails.

3. we use _____



to keep our hair tidy.

4. we use a _____



to blow our nose.

5. we use clean _____



to wipe our body.

6. we use _____



and _____



to clean our teeth.

Name: _____

Summer TIME

My favorite thing to
do at the beach



My favorite
summer activity

My favorite summer sport



My favorite summer treat



FUN TIME

◆ ◆ Spend **Dinner time** with your family in any restaurant, take a family picture and paste it in your scrapbook. ◆ 🍷 🍴 🍽️ 🍴 🍷 🍽️ Enjoy your favourite food... 🍷 🍴 🍽️



DAV PUBLIC SCHOOL , Patliputra Colony
Holiday Home work

- **Plant a Tulsi or Medicinal Plant: Plant and observe the growth of a tulsi or other medicinal plant.**
- **Know Your Country: Paste a map of India, mark your state with green colour in scrapbook.**
- **Make a Portfolio in a new scrapbook.**
- **Write one page English and Hindi writing alternate days in Mixed Copy.**
- **Write and learn Table 2 to 6 in Mixed Copy.**
- **Do Reading practice daily.**
- **Revise all the taught Chapters.**

Note-:

- **Do all the given worksheets and arrange it in one clear bag (file) .**

Activities for Holidays Homework

1. Story Time: Read and learn any one story with moral values and narrate in the class using finger/hand puppets after vacation.

2. Paste any one fresh leaf in your scrapbook and see the change after 10 days.


3. Make a model of any table by using Cardboard and plastic bottle caps.

4. Make a colourful chart of Vowels and Consonants.

5. Draw a Rangoli with different Shapes and paste different types of pulses in Scrapbook.

6. Make a different creative items with the help of Paper plates.

7. One page English cursive writing and one page hindi writing alternate in mixed copy.



NOTE: All the work is to be done on A4 sized colored pastel sheets. Once the work is completed all the sheets should be spiral bound to give it a shape of a book. Decorate the outer cover with child's drawing that reflects happy memories of the vacation. Make the booklet as colorful and beautiful as possible.



Think and write

1/6

- My Family



My Family

1 _____

2 _____

3 _____

4 _____

5 _____





My Self



1. My name is _____.

2. I am ____ years old.

3. I live in _____.

4. I study in class _____.

5. My school name is _____.

6. I love my parents and family.

7. My favorite subject is _____.

8. My favorite game is _____.

9. I like to _____, _____, and _____.

10. I am a _____ boy.





Our Country

A. Match the following :

A

1. South India
2. National Emblem
3. Chakra
4. Oldest banyan tree
5. National flower

B

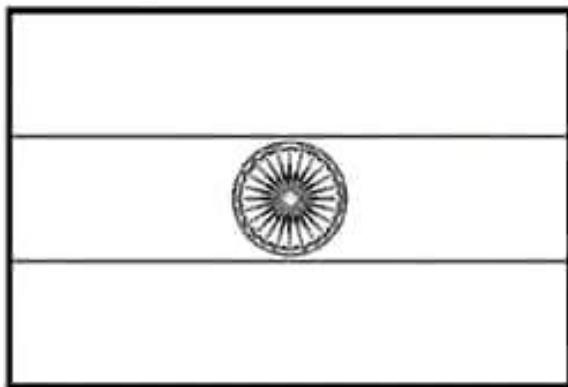
- a. 24 spokes
- b. Kolkata's botanical garden
- c. Lotus
- d. Famous temples
- e. Lion capital of Ashoka pillar

B. Fill in the blanks using words from the box :

Tricolour, Tiger, Vande Mataram, Ganga, Jana-Gana-Mana

1. _____ was written by Bankim Chandra Chatterjee.
2. _____ is our national animal.
3. _____ is our national anthem.
4. The _____ is our sacred river.
5. _____ is our national flag.

C. Colour the given pictures :



Name: _____

Date: _____

My Summer Vacation Photos!

I visited _____

I played _____

I ate _____

I made _____



"SAY CHEESE!"



My Body

A. Tick (✓) for right and (X) for false statement :

1. Eyes help us to see.
2. We have ten fingers.
3. Ears help us to taste.
4. We see things with our nose.
5. Skin helps us to sense the touch.
6. Legs help us to walk.



B. Write the names of these sense organs :



C. Label the parts of the body :



CVC Paragraph Stories

Lunch on the Mat

Mom puts lunch on the mat,
A bun and jam are on the mat.
Sam sits on the mat.
Ben eats the bun.
Kids sit and chat.



Word Box: bun, jam, mat, sit, chat

A Walk to the Shop

Sam walks to the shop.
Dad gets a red cap.
A big bag is in Dad's hand.
Sam taps the bag.
Now they walk back.



Word Box: shop, cap, bag, tap, walk

The Sand Pit

Kids sit in the sand pit.
Sam digs in the sand.
Ben puts sand in a cup,
A red truck runs in sand.
Kids have fun in sand.



Word Box: sand, pit, dig, cup, fun

The Hot Sun

Hot sun is in the sky.
Kids run in the yard.
Sam sits on a log.
A red cap is on Sam's head.
Sun makes the day hot.



Word Box: sun, sky, log, cap, hot

COMPLETE THE SENTENCES

My Favourite Toy

Look at the picture and complete the sentences.



Word Help

- toy
- car
- red
- play
- wheels

Circle the Correct Word

My toy is
car / tree / house

My toy is
big / sky / table

Complete the Sentences









1. My favourite toy is a _____.
2. My toy is _____ in color.
3. My toy has _____ wheels.
4. I like to _____ with my toy
5. I love my _____ very much



Draw your favourite toy in the box.

Learn A and An

👉 Fill in the blanks with **A** or **An**.

A / An	Words	Picture
<input type="text"/>	apple	
<input type="text"/>	dog	
<input type="text"/>	inkpot	
<input type="text"/>	elephant	
<input type="text"/>	nest	
<input type="text"/>	fan	
<input type="text"/>	watch	
<input type="text"/>	cat	

Opposite Words –

MCQ (Objective Type)



- 1 What is the opposite of **big**?
A) small B) tall C) long D) wide
- 2 What is the opposite of **happy**?
A) sad B) angry C) smile D) laugh
- 3 What is the opposite of **hot**?
A) warm B) cold C) heat D) fire
- 4 What is the opposite of **up**?
A) above B) high C) down D) top
- 5 What is the opposite of **fast**?
A) quick B) speed C) slow D) run
- 6 What is the opposite of **day**?
A) morning B) noon C) night D) sun
- 7 What is the opposite of **open**?
A) start B) close C) begin D) enter
- 8 What is the opposite of **old**?
A) new B) young C) small D) big
- 9 What is the opposite of **strong**?
A) powerful B) weak C) heavy D) hard
- 10 What is the opposite of **clean**?
A) neat B) dirty C) clear D) top



Noun – MCQ (Objective Type)



- 1** Which word is a noun?
A) Run B) Eat C) Dog D) Jump

- 2** Choose the noun.
A) Happy B) Book C) Fast D) Run

- 3** Which word is a noun?
A) Jump B) Play C) Ball D) Run

- 4** Identify the noun.
A) Teacher B) Read C) Write D) Jump

- 5** Which is a noun?
A) Run B) Apple C) Eat D) Jump

- 6** Choose the naming word (noun).
A) Drink B) Cat C) Run D) Play

- 7** Which word is a noun?
A) Sing B) Dance C) Car D) Run

- 8** Find the noun.
A) Boy B) Jump C) Eat D) Run

- 9** Which is a noun?
A) Run B) Jump C) School D) Play

- 10** Choose the noun.
A) Flower B) Run C) Eat D) Jump



Preposition MCQ Worksheet

Choose the correct preposition for each sentence.

(in, on, under, beside, between, behind, in front of, above, near, into, out of, across)

1. The cat is sleeping _____ the bed.

- a) under
- b) beside
- c) on



2. She is standing _____ the door.

- a) in front of
- b) between
- c) above



3. The apples fell _____ the basket.

- a) behind
- b) out of
- c) into



4. Mark is swimming _____ the river.

- a) near
- b) under
- c) in



5. The plate is _____ the table.

- a) on
- b) in
- c) above



6. There is a park _____ our house.

- a) behind
- b) into
- c) across



7. Tom is sitting _____ his sister.

- a) beside
- b) under
- c) between



8. She walked _____ the corner store.

- a) in
- b) into
- c) out of



9. The frog jumped _____ the well.

- a) above
- b) out of
- c) into



10. The car is parked _____ the garage.

- a) in
- b) on
- c) under



11. The plane is flying _____ the clouds.

- a) under
- b) behind
- b) above



12. There is a lamp _____ the table.

- a) beside
- b) across
- c) on



Finish the words using the Vowels

A E I O U



S__N



L__G



B__LL



T__B



__GLOO



D__CK



S__CK



B__T



T__NT



F__RE



__NT



K__Y



P__G



D__G



B__Y



L__G

Class 2 Math Worksheet Set 1

NUMBERS (1-1000)



Section 1: Write the words

145 → _____

520 → _____

999 → _____

309 → _____

678 → _____

768 → _____

Section 2: Counting & Missing Numbers

198, _____, 200

345, 346, _____, 348

470, _____, _____, 473

699, _____, 701

780, _____, _____, 783

851, _____, _____, 854

915, _____, _____, 918

990, _____, _____, 993



Section 3: Before, After & Between

Number

Before

After

Between Numbers

256

345 _____ 347

400

698 _____ 700

789

899 _____ 901



Section 4: Choose the Correct Answer (MCQ)

Q1. What comes before 600?

a) 599 b) 601 c) 610 c) 590 d) 590

Q2. What comes after 799?

a) 798 b) 800 c) 801 c) 801 d) 700

Q3. What comes between 432 and 434?

a) 430 b) 431 c) 433 d) 435 d) 435



MATHS WORKSHEET 5

2/3

Two-Digit Subtraction (With Borrowing)

$$\begin{array}{r} 52 \\ - 28 \\ \hline \end{array}$$

$$\begin{array}{r} 41 \\ - 26 \\ \hline \end{array}$$

$$\begin{array}{r} 62 \\ - 37 \\ \hline \end{array}$$

$$\begin{array}{r} 51 \\ - 29 \\ \hline \end{array}$$

$$\begin{array}{r} 63 \\ - 47 \\ \hline \end{array}$$

$$\begin{array}{r} 53 \\ - 38 \\ \hline \end{array}$$

$$\begin{array}{r} 64 \\ - 48 \\ \hline \end{array}$$

$$\begin{array}{r} 65 \\ - 45 \\ \hline \end{array}$$

$$\begin{array}{r} 74 \\ - 58 \\ \hline \end{array}$$

$$\begin{array}{r} 64 \\ - 49 \\ \hline \end{array}$$

$$\begin{array}{r} 74 \\ - 59 \\ \hline \end{array}$$

$$\begin{array}{r} 74 \\ - 56 \\ \hline \end{array}$$

$$\begin{array}{r} 85 \\ - 69 \\ \hline \end{array}$$

$$\begin{array}{r} 75 \\ - 57 \\ \hline \end{array}$$

$$\begin{array}{r} 95 \\ - 67 \\ \hline \end{array}$$

$$\begin{array}{r} 82 \\ - 67 \\ \hline \end{array}$$

$$\begin{array}{r} 96 \\ - 78 \\ \hline \end{array}$$

$$\begin{array}{r} 86 \\ - 68 \\ \hline \end{array}$$

$$\begin{array}{r} 71 \\ - 56 \\ \hline \end{array}$$

$$\begin{array}{r} 93 \\ - 78 \\ \hline \end{array}$$

MATHS WORKSHEET 8

Two-Digit Addition (With Carry)

$$\begin{array}{r} 39 \\ + 17 \\ \hline \end{array}$$

$$\begin{array}{r} 28 \\ + 19 \\ \hline \end{array}$$

$$\begin{array}{r} 29 \\ + 18 \\ \hline \end{array}$$

$$\begin{array}{r} 27 \\ + 19 \\ \hline \end{array}$$

$$\begin{array}{r} 48 \\ + 26 \\ \hline \end{array}$$

$$\begin{array}{r} 37 \\ + 28 \\ \hline \end{array}$$

$$\begin{array}{r} 38 \\ + 27 \\ \hline \end{array}$$

$$\begin{array}{r} 36 \\ + 28 \\ \hline \end{array}$$

$$\begin{array}{r} 57 \\ + 18 \\ \hline \end{array}$$

$$\begin{array}{r} 46 \\ + 17 \\ \hline \end{array}$$

$$\begin{array}{r} 47 \\ + 16 \\ \hline \end{array}$$

$$\begin{array}{r} 45 \\ + 17 \\ \hline \end{array}$$

$$\begin{array}{r} 68 \\ + 27 \\ \hline \end{array}$$

$$\begin{array}{r} 55 \\ + 29 \\ \hline \end{array}$$

$$\begin{array}{r} 56 \\ + 26 \\ \hline \end{array}$$

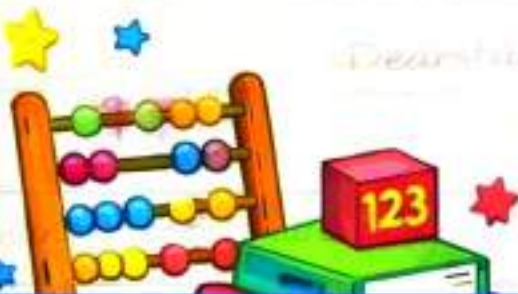
$$\begin{array}{r} 54 \\ + 29 \\ \hline \end{array}$$

$$\begin{array}{r} 79 \\ + 16 \\ \hline \end{array}$$

$$\begin{array}{r} 64 \\ + 18 \\ \hline \end{array}$$

$$\begin{array}{r} 56 \\ + 17 \\ \hline \end{array}$$

$$\begin{array}{r} 63 \\ + 18 \\ \hline \end{array}$$



1. $245 + 35 =$

- a) 270 b) 280 c) 290 d) 300
-

2. Place value of 6 in 462 is

- a) 6 b) 60 c) 600 d) 42
-

3. $80 - 27 =$

- a) 43 b) 53 c) 63 d) 73
-

4. $7 \times 5 =$

- a) 30 b) 32 c) 35 d) 40
-

5. Smallest number

- a) 409 b) 490 c) 904 d) 940
-

6. Shape with 4 equal sides

- a) Circle b) Triangle c) Square d) Oval
-

7. 1 hour = ___ minutes

- a) 30 b) 45 c) 60 d) 90
-

8. Number after 999

- a) 1000 b) 998 c) 990 d) 100
-

9. $100 \div 10 =$

- a) 5 b) 10 c) 20 d) 50
-

10. Which has no corners?

- a) Square b) Rectangle c) Triangle d) Circle



Name: _____

Date: _____



पानी का जादू



पप्पू एक छोटे से गाँव में रहता था। गर्मी के दिनों में उसके गाँव में पानी की कमी हो जाती थी। एक दिन, पप्पू ने खुदाई करते समय एक बड़े पत्थर को हिलाया। तभी उसके पास से पानी की एक छोटी धारा बहने लगी। पप्पू ने खुशी-खुशी पानी पीना शुरू किया। अचानक, पानी की धारा बड़ी हो गई और वह एक छोटे से नदी बन गई। सभी गाँववाले आकर पानी पीने लगे और उनकी मुश्किलें खत्म हो गईं।



प्रश्न:

1. पप्पू के गाँव में किसकी कमी होती थी?



2. पप्पू ने कैसे गाँववालों की मदद की?



3. पानी की धारा कैसे बड़ी हुई?



4. इस कहानी से हमें क्या सीख मिलती है?



5. सभी गाँववाले पानी का क्या करने लगे?



संज्ञा (Sangya)

निम्न वाक्य में से संज्ञा शब्द छाँटकर लिखिए -

रीना स्कूल में किताब पढ़ती है।

उत्तर: _____



चित्र वर्णन (Picture Description)

चित्र को देखकर दो वाक्य लिखिए -



1. _____

2. _____

नाम: _____

तिथि: _____

वाक्य बनाइए

नीचे दिए गए शब्दों से सुंदर वाक्य बनाइए।

1. बच्चा





2. स्कूल





3. फूल





4. पक्षी





5. पुस्तक





6. सूरज





विपरीत शब्द

नीचे दिए गए शब्दों के विपरीत (उलटे) शब्द लिखिए।

1. दिन



6. अंदर



2. बड़ा



7. कम



3. गर्म



8. आना



4. ऊपर



9. हल्का



5. अच्छा



10. नया





नाम: _____

तिथि: _____

संज्ञा

शब्द के चुनाव के लिए

कक्षा - 2



संज्ञा क्या है?

किसी व्यक्ति, वस्तु, स्थान, जानवर या भाव के नाम को संज्ञा कहते हैं।

जैसे - राम, किताब, दिल्ली, बिल्ली, पेड़, खुशी आदि।



दिए गए शब्दों में से सही संज्ञा शब्द चुनकर खाली स्थान भरिए -

राम दिल्ली किताब कुत्ता स्कूल
बगीचा हाथी पानी माँ गेंद



1.  _____ बाजार जा रहा है।

2.  हम रोज _____ जाते हैं।


3.  मैंने नई _____ खरीदी।

4.  _____ बहुत बड़ा जानवर है।

5.  हमें रोज _____ पीना चाहिए।

6.  दादी जी _____ में टहल रही हैं।

7.  मेरी _____ बहुत अच्छी है।

8.  राहुल के पास एक लाल _____ है।

नीचे दिए गए शब्दों में से संज्ञा शब्द छाँटकर लिखिए -

गाना	मोहन	दौड़ना	सूरज	अच्छा
कमल	पीना	किताब	मीठा	शेर
दिल्ली	सोना	नदी	सुंदर	बच्चा

संज्ञा शब्द - _____, _____, _____

चित्र देखकर दो संज्ञा शब्द लिखिए -



1. _____
2. _____



याद रखें: संज्ञा शब्द नाम बताता है।



नीचे लिखे वाक्यों को पढ़ कर उनके लिए उन
के लिए एक सही शब्द ढूँढें !



सुनार जंगली चित्रकार



बढ़ई

किसान

सैनिक

धोबी



जो चित्र बनाता हो	:	
जो खेती करता हो	:	
जो सेना में काम करता हो	:	
जो कपड़े धोता हो	:	
जो गहने बनाता हो	:	
जो जंगल में रहता हो	:	
जो लकड़ी का काम करता हो	:	



DAV PUBLIC SCHOOL, PATLIPUTRA COLONY, PATNA-13

Holiday Home Work (2026-27)

Class - III

Summer Vacation

ENGLISH

- 1. Reading Time:**
 - Read any storybook (e.g., Panchatantra, The Jungle Book or Alice in Wonderland)
 - Create a Story Map on an A4 sheet showing the Title, Characters, and your favorite scene drawn and colored.
- 2. Creative Writing:**
 - Write 10 lines on "My Pet" (Focus on using neat cursive handwriting).
 - Write one page handwriting everyday in English H.A notebook (Focus on using neat cursive handwriting).
- 3. Vocabulary Boost:**
 - Make a "Word Wall" in your scrapbook.
 - Every day, find one word from the DAV English Reader, write its meaning, and draw a small picture representing that word (Total: 20 words).
- 4. Speaking Activity:**
 - Prepare a 1-minute speech on "Live and Let Live" and practice it in front of a mirror to build confidence.
- 5. Fun Activity:**
 - Make a colorful chart on "Nouns" (Naming words).
 - Collect 5 pictures of People, 5 Places, and 5 Things and paste them neatly on A4 sheet paper.
 - Collect 5 pictures of different breeds of dog, paste them neatly on A4 sheet paper and write one sentence on it

HINDI

1. लेखन: अपने किसी पसंदीदा खिलौने या पालतू जानवर की आत्मकथा 5 से 8 पंक्तियों में लिखें।
2. रचनात्मक: वर्णमाला के प्रत्येक अक्षर (अ-ह) से एक नया शब्द ढूँढें और उसका चित्र बनाकर एक 'सचित्र शब्दकोश' तैयार करें।
3. पठन: 'पंचतंत्र' या 'जातक कथाएँ' की कोई भी दो कहानियाँ पढ़ें और उनके मुख्य पात्रों के नाम लिखें।
4. व्याकरण: घर में मौजूद किन्हीं दस वस्तुओं की सूची बनाकर उनका लिंग (स्त्रीलिंग/पुल्लिंग) पहचानें।

MATHS

A.MCQ Questions – Numbers up to 9999 and Addition (Class 3)

1.What is the smallest 4-digit number?

- a) 100
- b) 999
- c) 1000
- d) 1111

2.What is the number name of 4582?

- a) Four thousand five hundred twenty-eight
- b) Four thousand five hundred eighty-two
- c) Four hundred fifty-eight two
- d) Four thousand eighty-two

3.Which digit is in the hundreds place in 7643?

- a) 7
- b) 6
- c) 4
- d) 3

4. What comes after 5999?

- a) 6000
- b) 5998
- c) 5000
- d) 7000

5 What comes before 3400?

- a) 3399
- b) 3401
- c) 3300
- d) 3000

6. Which number is greater?

- a) 4321
- b) 4231
- c) Both are equal
- d) None

7. Arrange in ascending order: 3456, 6543, 2345

- a) 6543, 3456, 2345
- b) 2345, 3456, 6543
- c) 3456, 2345, 6543
- d) 2345, 6543, 3456

8. Expanded form of 5284 is:

- a) $5000 + 200 + 80 + 4$
- b) $500 + 20 + 80 + 4$
- c) $5000 + 20 + 8 + 4$
- d) $5000 + 200 + 8 + 4$

9. How many tens are there in 3470?

- a) 34**
- b) 347**
- c) 3470**
- d) 3**

10. Which number has 9 in the thousands place?

- a) 9876**
- b) 7896**
- c) 6987**
- d) 8697**

11. $2456 + 1234 = ?$

- a) 3680**
- b) 3690**
- c) 3570**
- d) 3670**

12. $3200 + 450 = ?$

- a) 3650**
- b) 3750**
- c) 3540**
- d) 3450**

13. Add: $1111 + 2222$

- a) 3333**
- b) 4444**
- c) 2233**
- d) 3322**

14. $4567 + 1000 = ?$

- a) 5567**
- b) 4667**
- c) 6567**
- d) 4577**

15. What is the sum of 2500 and 2500?

- a) 4000**
- b) 4500**
- c) 5000**
- d) 5500**

16. Add: $4321 + 1111$

- a) 5332**
- b) 5432**
- c) 5222**
- d) 4322**

17. Which is the correct answer?

$6200 + 300 + 40 + 5 =$

- a) 6235**
- b) 6345**
- c) 6543**
- d) 6205**

18. $7890 + 10 = ?$

- a) 7880**
- b) 7900**
- c) 7990**
- d) 7800**

19. Find the missing number:

$$3400 + \underline{\quad} = 4500$$

a) 100

b) 1100

c) 1200

d) 1300

20. Which addition is correct?

a) $2300 + 1200 = 3500$

b) $2300 + 1200 = 3400$

c) $2300 + 1200 = 3600$

d) $2300 + 1200 = 3300$

B. Do brain teaser of chapter 1.

C. Activity-5. Place Value Art

Draw a "Place Value House" with:

Thousands

Hundreds

Tens

Ones

Write 10 numbers and show their digits in the correct places.

D. Write and learn multiplication table from 2 to 20.

SCIENCE**Q.A Fill in the Blanks.**

- 1 Leaves prepare food for the plant, which is why they are called the "food factory" or _____ of the plant.
- 2.The green substance present in leaves is called _____.
- 3.In olden days, saints and people used to _____ on certain types of leaves.
- 4.Leaves of plants like _____ and _____ are eaten as vegetables.
- 5.Plants take in harmful gases and give out _____ gas during the daytime, which helps keep the air fresh.
- 6.Plants are very important because they give us _____ to breathe and _____ to eat.
- 7.We get wood for making furniture and building houses from _____.
- 8.The thick and woody stem of a big tree is called a _____.
- 9.Leaves help the plant get rid of excess water through tiny pores called _____.
- 10.Many plant products like flowers, roots, and _____ are used as medicines.

Q.B Answer the following questions:

- Q1. Which part of the plant prepares food?
- Q2. Why is the leaf called the 'kitchen of the plant'?
- Q3. Name two leaves that we eat as food
- Q4. What were leaves used for in the olden days before paper was invented?
- Q5. What do fallen leaves change into that helps plants to grow better?
- Q6 Which leaves are used as plates in southern India.
- Q7 Name two leaves that are used to make our food look attractive (garnish).

C.PROJECT: Collect dry leaves of any plant and make any two.

Butterfly, Tree, Fish, Peacock.

**SOCIAL
SCIENCE**

Create 20 MCQs from Ch- 1, Ch- 2 and Ch- 3

Make a project on different types of Food.

Write a short note on Sunita Williams.

Create a collage on dresses of India

Learn and write Q/Ans. of Ch- 1 and Ch- 2

DAV PUBLIC SCHOOL, PATLIPUTRA COLONY, PATNA-13

Holiday Home Work (2026-27)

Class - IV

Summer Vacation

ENGLISH

- 1. Reading Time:**
 - Read any storybook (e.g., Panchatantra, Akbar Birbal Tales or Gulliver's Travels).
 - Create a Story Map on an A4 sheet showing the Title, Characters, with a beautiful drawing.
- 2. Creative Writing:**
 - Write 10 lines on 'My First Day in School' in neat handwriting.
 - Everyday, write one page handwriting in English H.A notebook (Focus on using neat cursive handwriting).
- 3. Vocabulary Boost:**
 - Make a "Word Wall" in your scrapbook.
 - Every day, find one word from the DAV English Reader, write its meaning, and draw a small picture representing that word (Total: 20 words).
- 4. Speaking Activity:**
 - Prepare a 1-minute speech on 'Time is Money' and practice it in front of a mirror to build confidence.
- 5. Fun Activity:**
 - Make a colorful chart on Collective Nouns and Genders
 - Collect 5 pictures of sports, 5 sportsmen, and 5 things used in sports, and paste them neatly.

HINDI

1. *डायरी लेखन:* छुट्टियों के किन्हीं भी 5 विशेष दिनों के अनुभवों को डायरी के रूप में लिखें।
2. *मौखिक:* अपनी पसंद की किसी एक हिंदी कविता को याद करें और उचित हाव-भाव के साथ उसका वीडियो बनाएँ या अभ्यास करें।
3. **व्याकरण:* अपने परिवार के प्रत्येक सदस्य के लिए दो-दो *विशेषण* शब्द लिखकर उनसे वाक्य बनाएँ।
4. *कला-कौशल:* एक सुंदर ग्रीटिंग कार्ड बनाएँ और उसमें अपने मित्र को छुट्टियों के बारे में 3-4 वाक्य हिंदी में लिखें।
- *5. कहानी लेखन:* चित्र देखकर या अपनी कल्पना से 8-10 पंक्तियों की एक छोटी कहानी लिखिए।

MATHS

***MCQ Questions -**

1.What is the largest 5- digit number?

- a) 10000
- b) 99999
- c) 100000
- d) 111111

2.What is the greatest 5-digit number?

- a) 9999
- b) 99999
- c) 100000
- d) 90000

3.Which digit is in the ten thousands place in 456789?

- a) 4
- b) 5
- c) 6
- d) 7

4.Expanded form of 305624 is:

- a) $300000 + 5000 + 600 + 20 + 4$**
- b) $300000 + 500 + 60 + 20 + 4$**
- c) $30000 + 5000 + 600 + 20 + 4$**
- d) $300000 + 5000 + 600 + 24$**

5.What comes after 999999?

- a) 100000**
- b) 1000000**
- c) 999998**
- d) 100999**

6.Which number is greater?

- a) 543210**
- b) 534210**
- c) Both are equal**
- d) None**

7.Arrange in ascending order: 456789, 234567, 345678

- a) 456789, 345678, 234567**
- b) 234567, 345678, 456789**
- c) 345678, 234567, 456789**
- d) 234567, 456789, 345678**

8.Number name of 708305 is:

- a) Seven lakh eight thousand three hundred five**
- b) Seven lakh eighty thousand five**
- c) Seven lakh eight hundred thirty-five**
- d) Seven thousand eight hundred five**

9. Place value of 5 in 452678 is:

- a) 5
- b) 50
- c) 50000
- d) 5000

10. How many thousands are there in 678945?

- a) 678
- b) 67
- c) 6
- d) 6789

11. $234567 + 123456 = ?$

- a) 358023
- b) 357023
- c) 356023
- d) 359023

12. Add: $450000 + 250000$

- a) 600000
- b) 700000
- c) 650000
- d) 750000

13. $567890 + 1000 = ?$

- a) 568890
- b) 567990
- c) 568990
- d) 577890

14. Subtract: $765432 - 123456 = ?$

- a) 641976**
- b) 642976**
- c) 643976**
- d) 644976**

15. $900000 - 450000 = ?$

- a) 550000**
- b) 450000**
- c) 500000**
- d) 350000**

16. Find the missing number:

$345678 + \underline{\quad} = 400000$

- a) 54322**
- b) 55322**
- c) 56322**
- d) 57322**

17. Which subtraction is correct?

- a) $800000 - 300000 = 500000$**
- b) $800000 - 300000 = 600000$**
- c) $800000 - 300000 = 400000$**
- d) $800000 - 300000 = 300000$**

18. What is the predecessor of 600000?

- a) 600001**
- b) 599999**
- c) 500000**
- d) 600100**

19. $432100 + 111111 = ?$

a) 543211

b) 542211

c) 543111

d) 544211

20. Subtract: $700000 - 234567 = ?$

a) 465433

b) 466433

c) 467433

d) 468433

B. Place Value Poster

Make a colourful place value chart with:

Lakhs

Ten Thousands

Thousands

Hundreds

Tens

Ones

Write 10 six-digit numbers in the chart.

C. Do brain teasers of chapter 3 (multiplication).

D. Write and learn multiplication table from 2 to 20.

Class IV – Science

SCIENCE

Objective Questionnaire

Chapters: My Body, Plants, Flowers & Fruits

Q. Multiple Choice Questions (MCQs)

Digestion of food begins in the:

- a) Stomach
- b) Mouth
- c) Intestine
- d) Liver

Which teeth are used for tearing food?

- a) Incisors
- b) Molars
- c) Canines
- d) Premolars

Which part of the tongue helps us taste food?

- a) Veins
- b) Taste buds
- c) Muscles
- d) Bones

Which part of the plant absorbs water from the soil?

- a) Stem
- b) Root
- c) Leaf
- d) Flower

The green part of the plant that prepares food is:

- a) Flower
- b) Stem
- c) Leaf
- d) Root

Which type of root is found in grass?

- a) Tap root
- b) Fibrous root
- c) Aerial root
- d) Breathing root

Mango is a:

- a) Winter fruit
- b) Summer fruit
- c) Dry fruit
- d) Root vegetable

Which of the following is a leafy vegetable?

- a) Potato
- b) Spinach
- c) Carrot
- d) Onion

Flowers later change into:

- a) Roots
- b) Seeds
- c) Fruits
- d) Leaves

Fresh fruits and vegetables help us to remain:

- a) Weak
- b) Healthy
- c) Lazy
- d) Sick

Q. Fill in the Blanks

- a. The process of breaking down food is called ____.
- b. We should brush our teeth ____ times a day.
- c. Leaves are known as the food factory of the ____.
- d. Roots fix the plant firmly in the ____.
- e. Seasonal fruits are fresh and ____.

Q. True or False

- a. Molars help in chewing food.
- b. The tongue helps us to hear sounds.
- c. Plants need sunlight to make food.
- d. Flowers help in the formation of fruits and seeds.
- e. Eating stale food keeps us healthy.

Q. Match the Following

Column A

- a. Incisors
- b. Roots
- c. Leaves
- d. Flower
- e. Tongue

Column B

- Cutting food
- Absorb water
- Prepare food
- Changes into fruit
- Taste

Q. Very Short Answer Questions:

- a. Name the organ where food is digested.
- b. Which part of the plant makes food?
- c. Name one seasonal summer fruit.
- d. Why should we eat fresh food?
- e. Which roots are long and thick?

Project - Prepare a cut out of Mango and write few lines on it .

1. Create 20 MCQs from Ch- 1, Ch- 2 and Ch- 3
2. A project on An Ideal Home.
3. Write a paragraph on the importance of Family
4. Create a collage on festivals in India
5. Learn and write all Q/Ans. of Ch- 1 and Ch- 2

DAV PUBLIC SCHOOL, PATLIPUTRA COLONY, PATNA-13

Holiday Home Work -2026-27

Class - V

Summer Vacation

ENGLISH

1. Reading Time:

Read any story of Adventures of Tom Sawyer , Swami and his Friend or Eklavya .(any one)Write a brief Character Sketch (5–8 lines) of the person you liked the most in the story.

2. Creative Writing:

Write a paragraph (12–15 lines) on "My Best Friend" and a letter to uncle thanking for the birthday gift he sent.

3. Vocabulary Boost: "Dictionary Detective": Find 20 new words from Unit 2 "Books." Write their meanings .

4. Speaking Activity: "Show and Tell": write a poem on My favourite things and recite.

5. Fun Activity:

- Create a "Determiners Pizza. Cut a circle from a chart paper, divide it into slices, and write different types of Determiners (with examples) on each slice and paste it on a A4 size paper
- Prepare a chart on Power of Words (A4 size paper)
- Make a book mark.
- Make a chart on Abstract Noun and Apostrophe

Writing Work:Write one page daily.(copy down the tree chapters taught)

HINDI

01. संवाद लेखन: अपने दादा-दादी या नाना-नानी से उनके बचपन की छुट्टियों के बारे में पूछें और उस बातचीत को 'संवाद' के रूप में लिखें।
02. व्यक्तिवाचक, जातिवाचक, द्रव्यवाचक, भाववाचक तथा समूहवाचक संज्ञाओं का शब्द-समूह बनाएं।
03. खोज कार्य: रसोई में इस्तेमाल होने वाले किन्हीं 5 मसालों के हिंदी नाम लिखें और उनके उपयोग का एक छोटा चार्ट तैयार करें।
04. व्याकरण: किन्हीं 10 मुहावरों का अर्थ लिखकर उनका वाक्यों में प्रयोग करें।
05. (क) सरदार पटेल पर 10 पंक्तियाँ लिखिए।
(ख) "राष्ट्रीय एकता" पर सुंदर पोस्टर बनाइए।

MATHS

A.MCQ Questions -

1.What is the smallest 7-digit number?

- a) 100000
- b) 1000000
- c) 999999
- d) 10000

2.Which place comes after lakhs in the Indian place value system?

- a) Thousands
- b) Crores
- c) Tens
- d) Hundreds

3.What is the number name of 1,25,43,678?

- a) One crore twenty-five lakh forty-three thousand six hundred seventy-eight
- b) Twelve crore fifty-four lakh thirty-six thousand seventy-eight
- c) One lakh twenty-five thousand forty-three six seventy-eight
- d) One crore twenty-five thousand forty-three hundred seventy-eight

4. Expanded form of 45,06,321 is:

- a) $40,00,000 + 5,00,000 + 6,000 + 300 + 20 + 1$
- b) $4,00,000 + 50,000 + 6,000 + 300 + 20 + 1$
- c) $45,00,000 + 6,000 + 321$
- d) $40,00,000 + 50,000 + 6,000 + 21$

5. Which number is greater?

- a) 56,78,901
- b) 56,87,901
- c) Both are equal
- d) None

6. What is the successor of 99,99,999?

- a) 1,00,00,000
- b) 99,99,998
- c) 10,00,000
- d) 1,00,000

7. Add: $45,67,890 + 12,34,560 = ?$

- a) 58,02,450
- b) 57,92,450
- c) 58,12,450
- d) 57,02,450

8. Subtract: $90,00,000 - 45,67,890 = ?$

- a) 44,32,110
- b) 45,32,110
- c) 44,22,110
- d) 45,22,110

9. Multiply: $250 \times 40 = ?$

- a) 1000**
- b) 10000**
- c) 100**
- d) 100000**

10. Divide: $7200 \div 9 = ?$

- a) 700**
- b) 800**
- c) 900**
- d) 600**

11. Which of the following is a factor of 24?

- a) 5**
- b) 7**
- c) 6**
- d) 9**

12. Which number is a multiple of 8?

- a) 42**
- b) 48**
- c) 54**
- d) 62**

13. How many factors does 12 have?

- a) 4**
- b) 5**
- c) 6**
- d) 7**

14. Which pair are common factors of 18 and 24?

- a) 1, 2, 3, 6
- b) 1, 5, 7
- c) 2, 5, 9
- d) 4, 8, 12

15. What is the greatest common factor (GCF) of 8 and 12?

- a) 2
- b) 3
- c) 4
- d) 6

16. Which number is divisible by 5?

- a) 123
- b) 456
- c) 890
- d) 347

17. The product of any number and 1 is:

- a) 0
- b) The number itself
- c) 10
- d) Always even

18. Which number is both a factor and multiple of itself?

- a) 1
- b) 0
- c) Every number
- d) 10

19. Find the missing number:

$$45,000 + \underline{\quad} = 70,000$$

- a) 20,000
- b) 25,000
- c) 30,000
- d) 35,000

20. Which statement is correct?

- a) Every multiple of 2 is odd
- b) Factors of a number are always greater than the number
- c) Multiples of a number are infinite
- d) A number has infinite factors

B. 1. Indian Place Value Chart Project

Make a colourful Indian place value chart showing:

Ones

Tens

Hundreds

Thousands

Lakhs

Crores

Write 10 large numbers in the chart.

C. Do brain teasers of chapter 1 and 2.

D. Write and learn table 2 to 20.

**SOCIAL
SCIENCE**

1. Create 25 Question and answers from Ch 1 ,2 and ch 3.
2. Draw a project on ' My Family Tree'
3. List the problems faced by Migrants and help needed.
4. Create a collage on types of houses.
5. Learn the Questions and answers from taught chapters.

Note: All to be done in [S.Sc HomeWork Copy](#)

SCIENCE

Class 5 (science)

Q. Fill in the blanks

1. We keep dogs and cats as
 - 2assist police in various search operations.
 3. Oxen and horses are used as animals.
 4. Pearls, used as jewelry, are obtained from
 5. Leather is a useful product made from the of dead animals.
 6. The of an elephant is made of ivory.
 7. The practice of killing wild animals for their valuable body parts is called
1. Q: What are the main products we get from forests?
 2. Q: What is deforestation?
 3. Q: Name any two ways through which forests prevent floods.

4. Q: What is Van Mahotsav? When is it celebrated?
5. Q: Name 2 animals that live in forests of India.
6. Q: Why are animals called our friends? Give 1 reason ?
7. Q: What do we call animals that eat only plants?
8. Q: Name two endangered animals of India.
9. Q: What is the use of a camel to people in deserts?
10. Q: How can we help in protecting forests and animals?
- Project: Make a collage of Forest Products.

वर्ग: पञ्चम (संस्कृतम्)

SANSKRIT

०१. संस्कृते स्व-परिचयं लिखन्तु (संस्कृत में अपना परिचय लिखो)
०२. पठ्, लिख् धातु रूपाणि (लट्, लङ् लकारे लिखन्तु)
०३. 'बालक' (अकारान्त पुलिङ्ग) शब्द-रूपाणि (लिखन्तु)
- नोट: सभी प्रश्नों का उत्तर रंगीन चार्ट पेपर पर लिखें।

DAV PUBLIC SCHOOL, PATLIPUTRA COLONY, PATNA-13

Holiday Home Work -2026-27

Class - VI

Summer Vacation

ENGLISH

1. Reading Time: Read a novel like The Adventures of Tom Sawyer or Swami and Friends. Prepare a "Book Review" including:
Summary,
The moral of the story.

2. Creative Writing:
: Value of Physical training in your life.
Write a paragraph on 'My Hobby'.

3. Vocabulary Boost: Maintain a Personal Glossary. Note down 25 Regular and 25 Irregular Verbs and find their three forms (V1, V2, V3).

4. Speaking Activity: Prepare a speech on 'What is your professional aim'

5. Activity: Make a project on Life events of Mahatma Gandhi.(A4 size paper)

HINDI

1. जल संरक्षण या स्वच्छ भारत पर एक आकर्षक विज्ञापन तैयार करें विज्ञापन तैयार करें।
2. प्रतिदिन हिंदी अखबार से एक नए कठिन शब्द लिखें और उसका अर्थ लिखकर वाक्य बनाएं।
3. संज्ञा और उसके भेद को सुंदर से लिखकर चार्ट पेपर पर दर्शाएँ।
4. ज्ञान सागर और अभ्यास सागर में पढ़ाए गए पाठों की पुनरावृत्ति करें।
5. छात्रवृत्ति लेने के लिए अपने विद्यालय की प्रधानाचार्य को प्रार्थना पत्र लिखें।

MATHS

A.MCQ Questions –

1.Which is the smallest natural number?

- a) 1
- b) 0
- c) -1
- d) 10

2.Which is the smallest whole number?

- a) 1
- b) -1
- c) 0
- d) 2

3.Which of the following is not a natural number?

- a) 5
- b) 12
- c) 0
- d) 18

4. Whole numbers are:

- a) Negative numbers only**
- b) Counting numbers with 0**
- c) Fractions only**
- d) Odd numbers only**

5. What comes just before 1000?

- a) 999**
- b) 1001**
- c) 998**
- d) 990**

6. Which of the following is a factor of 36?

- a) 5**
- b) 7**
- c) 9**
- d) 11**

7. Which number is a multiple of 12?

- a) 36**
- b) 25**
- c) 41**
- d) 19**

8. How many factors does 15 have?

- a) 2**
- b) 3**
- c) 4**
- d) 5**

9. Which of the following is a prime number?

- a) 9
- b) 15
- c) 17
- d) 21

10. Which of the following is a composite number?

- a) 2
- b) 3
- c) 5
- d) 12

11. What is the common factor of 18 and 24?

- a) 5
- b) 7
- c) 6
- d) 11

12. The first multiple of every number is:

- a) 0
- b) 1
- c) The number itself
- d) 10

13. Which integer is less than 0?

- a) 5
- b) 2
- c) -3
- d) 1

14. Which integer is greater than -5?

- a) -8
- b) -10
- c) -6
- d) -2

15. The opposite of +9 is:

- a) 9
- b) -9
- c) 0
- d) 1

16. Which of the following integers is the greatest?

- a) -1
- b) -5
- c) 0
- d) -10

17. What is the sum of 5 and -3?

- a) 8
- b) -8
- c) 2
- d) -2

18. What is $-7 + 2$?

- a) 9
- b) -5
- c) 5
- d) -9

19. Which statement is true?

- a) Every factor is greater than the number**
- b) Multiples are finite**
- c) Every number has infinite multiples**
- d) Prime numbers have more than two factors**

20. Which of the following is an even whole number?

- a) 13**
- b) 17**
- c) 24**
- d) 29**

B. Project: Write prime numbers between 1 and 100 on biosheet.

C. Do brain teasers of chapter 1 and 2.

D. Learn and write table 2 to 20.

Science Questionnaire

Topics: States of Matter & Separation of Substances

Class 6

SCIENCE

Multiple Choice Questions (MCQs)

Anything that occupies space and has mass is called: a) Energy

- b) Matter**
- c) Force**
- d) Motion**

Which state of matter has a fixed shape and fixed volume? a) Liquid

- b) Gas**
- c) Solid**
- d) Vapour**

Liquids: a) Have fixed shape

b) Have no volume

c) Take the shape of the container

d) Cannot flow

Gases: a) Have fixed shape

b) Have fixed volume

c) Occupy all available space

d) Cannot be compressed

Which of the following is an example of gas? a) Milk

b) Stone

c) Oxygen

d) Ice

Which method is used to separate husk from grains? a) Filtration

b) Winnowing

c) Churning

d) Sedimentation

Tea leaves are separated from tea by: a) Sieving

b) Evaporation

c) Filtration

d) Threshing

Salt is obtained from seawater by: a) Sedimentation

b) Churning

c) Evaporation

d) Winnowing

Which method is used to separate cream from milk? a) Filtration

b) Churning

c) Sieving

d) Decantation

Sand and water can be separated by: a) Winnowing

b) Filtration

- c) Churning
- d) Threshing

Fill in the Blanks

Matter exists in _____, liquid and gas forms.

Solids have a fixed shape and fixed _____.

Liquids can flow but do not have a fixed _____.

The process of separating insoluble solids from liquids is called _____.

Salt can be separated from seawater by _____.

True or False

Gases have neither fixed shape nor fixed volume.

Liquids can be compressed easily.

Winnowing is done in open air.

Filtration separates dissolved substances from water.

Churning is used to separate butter from curd.

Match the Following

Column A

Column B

Solid

Fixed shape and volume

Liquid

Takes shape of container

Gas

Occupies all available space

Winnowing

Separates husk from grains

Evaporation

Obtaining salt from seawater

Assertion–Reason Questions

Choose the correct option:

- a) Both Assertion and Reason are true and Reason is the correct explanation of Assertion.**
- b) Both Assertion and Reason are true but Reason is not the correct explanation of Assertion.**
- c) Assertion is true but Reason is false.**
- d) Assertion is false but Reason is true.**

Assertion (A): Solids have a fixed shape.

Reason (R): Particles in solids are tightly packed.

Assertion (A): Gases can be compressed easily.

Reason (R): Particles in gases are far apart.

Assertion (A): Winnowing is used to separate husk from grains.

Reason (R): Husk particles are lighter than grains.

Assertion (A): Salt can be obtained from seawater by evaporation.

Reason (R): Water changes into vapour on heating.

Assertion (A): Filtration can separate sand from water.

Reason (R): Sand is insoluble in water.

Reason-Based Objective Questions

Why do liquids take the shape of the container?

- a) They have fixed shape**
- b) Their particles can move freely**
- c) They have no particles**
- d) They are tightly packed**

Why can gases be compressed easily?

- a) Their particles are closely packed**
- b) Their particles are far apart**
- c) They have fixed volume**
- d) They are heavy**

Why is filtration used for sand and water mixture?

- a) Sand dissolves in water
- b) Sand is insoluble in water
- c) Water changes into vapour
- d) Sand floats on water

Why is evaporation used to obtain salt from seawater?

- a) Salt evaporates quickly
- b) Water changes into vapour leaving salt behind
- c) Salt melts easily
- d) Salt is lighter than water

Why is winnowing done in open air?

- a) To dry grains
- b) Wind helps separate lighter husk from grains
- c) To wash grains
- d) To remove stones

Very Short Answer Questions

Define matter.

Name the three states of matter.

Which state of matter has no fixed shape?

Name the method used to separate tea leaves from tea.

What is evaporation?

Draw and label Experimental set up for the process of

Sublimation

Filtration

Separating Funnel

Arrangement of Particles in three states of Matter.

**SOCIAL
SCIENCE**

- 1.Create 50 Question answer from Ch [1..ch..9](#) and Ch 21.
 - 2.Draw a project on Tools of Early Man.
 - 3.Write the Preamble of the Constitution highlighting it's key features.
 - 4.Make a collage on Green Revolution in India.
 - 5.Learn the Questions and answers of the taught chapters.
- Note:**All to be done in [S.Sc](#) Homework copy.

SANSKRIT

- ❁ जयतु संस्कृतम् ॥ जयतु भारतम् ॥ ❁
📖 अवकाशगृहकार्यं 📖
कक्षा : षष्ठम्
०१. पठ्, भू, गम्, अस् धातुरूपाणि
(लट्, लृट्, लङ् लकारेषु)
धातुरूपाणि त्रिषु लकारेषु लिखन्तु।
०२. एतत् (इदम्) तथा अस्मद् सर्वनाम-शब्दरूपाणि
(त्रिषु लिङ्गेषु)
एतत्-शब्दस्य रूपाणि त्रिषु लिङ्गेषु लिखन्तु।
०३. अव्ययपदानि
पाठ्यपुस्तकात् अव्ययपदानि चित्वा लिखन्तु, स्मरन्तु च।
📝 नोटः 📝
उपर्युक्तानि शब्दरूपाणि, धातुरूपाणि तथा अव्ययपदानि वर्णयुक्ते चार्टपत्रे लिखित्वा कण्ठस्थं कुर्वन्तु।

DAV PUBLIC SCHOOL, PATLIPUTRA COLONY, PATNA-13

Holiday Home Work -2026-27

Class - VII

Summer Vacation

ENGLISH

- 1. Reading Time:** Read a novel like *Swami and Friends* or *Wings of Fire*. Prepare a "Book Review" including:
Plot Summary (100 words).
The moral of the story or what did you learn from the author's life.
- 2. Creative Writing:**
 - Prepare a short summary of chapters taught.
 - Do the Worksheets Unit 1 (English Reader)
 - Write a Letter to editor about noise pollution caused by loudspeakers.
- 3. Vocabulary Boost:** Maintain a Personal Glossary. Note down 25 "words from chapter 1 to 6 their parts of speech and meanings
- 4. Speaking Activity:** Record a 2-minute video (or prepare for a class presentation) on an advertisement of pen, toothpaste or a soft drink. "Draw it on bio sheet too.
- 5. Project:** Make a "Tense Transformer" wheel. Use two circular cards pinned at the center to show how a sentence changes from Present to Past and Future tense or prepare a chart on Tense.

HINDI

1. डायरी लेखन: छुट्टियों के किन्हीं भी पांच दिनों का अनुभव डायरी के रूप में लिखें। (HHW Notebook)
2. पत्र लेखन: अपने किसी मित्र या रिश्तेदार को पत्र लिखकर बताएं कि आपने अपनी गर्मी की छुट्टियां कैसे बिताईं। (HHW Notebook)
3. कविता/ कहानी लेखन :
'प्रकृति', 'मित्रता', 'अनुशासन', 'समय' में किसी एक विषय पर एक मौलिक कविता / कहानी लिखें। (HHW Notebook)
4. शब्द भंडार : प्रतिदिन हिंदी अखबार / कहानी की किताब से एक नए शब्द ढूंढकर उनके अर्थ लिखकर उनसे वाक्य बनाएँ। (HHW Notebook)
5. पर्यायवाची शब्द :

विद्यालय के किन्हीं दस वस्तुओं की सूची बनाकर उनके दो-दो पर्यायवाची शब्द लिखें।(HHW Notebook)
6.मुहावरे:
किन्हीं पाँच प्रसिद्ध मुहावरों को चार्ट पेपर पर चित्रों के माध्यम से दर्शाएँ और उनके अर्थ लिखें।(बायोशीट)
7.विज्ञापन :
खुद का एक काल्पनिक उत्पाद (कलम,साईकिल ,घड़ी आदि) बनाकर उसके लिए एक आकर्षक विज्ञापन बनाएँ।(बायोशीट)

MATHS

A.MCQ Questions –

1.Which of the following is a rational number?

- a) $\sqrt{2}$
- b) π
- c) $3/5$
- d) $\sqrt{7}$

2.A rational number can be written in the form:

- a) $a + b$
- b) a/b , where $b \neq 0$
- c) $a \times b$
- d) $a - b$

3.Which of the following is not a rational number?

- a) $2/3$
- b) $-5/7$
- c) 0
- d) $\sqrt{3}$

4.The denominator of a rational number cannot be:

- a) 1
- b) 5
- c) -3
- d) 0

5.Which rational number is greater?

- a) $2/5$
- b) $3/5$

c) Both are equal

d) None

6.The additive identity of rational numbers is:

a) 1

b) -1

c) 0

d) 10

7.The multiplicative identity of rational numbers is:

a) 0

b) 1

c) -1

d) 2

8.What is the reciprocal of $\frac{3}{7}$?

a) $\frac{3}{7}$

b) $\frac{7}{3}$

c) $-\frac{3}{7}$

d) $\frac{1}{7}$

9.Which of the following is equivalent to $\frac{2}{4}$?

a) $\frac{1}{2}$

b) $\frac{3}{4}$

c) $\frac{2}{5}$

d) $\frac{4}{2}$

10.Add: $\frac{2}{5} + \frac{1}{5} = ?$

a) $\frac{3}{10}$

b) $\frac{3}{5}$

c) $\frac{2}{10}$

d) 1

11.Subtract: $\frac{7}{8} - \frac{3}{8} = ?$

a) $\frac{4}{8}$

- b) $\frac{1}{2}$
- c) Both a and b
- d) $\frac{3}{8}$

12. Multiply: $\frac{2}{3} \times \frac{3}{4} = ?$

- a) $\frac{6}{12}$
- b) $\frac{1}{2}$
- c) $\frac{2}{7}$
- d) $\frac{5}{7}$

13. Divide: $\frac{4}{5} \div \frac{2}{3} = ?$

- a) $\frac{8}{15}$
- b) $\frac{6}{10}$
- c) $\frac{12}{10}$
- d) $\frac{5}{10}$

14. Which rational number is smallest?

- a) $-\frac{1}{2}$
- b) $\frac{1}{2}$
- c) 0
- d) $\frac{2}{3}$

15. The reciprocal of $-\frac{5}{9}$ is:

- a) $\frac{5}{9}$
- b) $-\frac{9}{5}$
- c) $\frac{9}{5}$
- d) $-\frac{5}{9}$

16. What is 0 multiplied by any rational number?

- a) 1

b) The same number

c) 0

d) Undefined

17. Which statement is true?

a) Rational numbers can be negative

b) Rational numbers cannot be fractions

c) Denominator can be 0

d) All rational numbers are whole number

18. Add: $-2/7 + 5/7 = ?$

a) $-3/7$

b) $3/7$

c) $7/14$

d) 1

19. Subtract: $3/4 - 1/2 = ?$

a) $1/4$

b) $2/4$

c) $3/2$

d) $1/2$

20. Which of the following is a proper rational number?

a) $7/3$

b) $9/4$

c) $2/5$

d) $11/2$

B. Do all questions of brain teaser of chapter 1 and 2.

C. Write any four properties of rational numbers with examples.

SCIENCE

Objective Questions – Chapter: Heat

Class 7 Level

Multiple Choice Questions (MCQs)

The SI unit of temperature is: a) Degree Celsius

b) Kelvin

c) Fahrenheit

d) Joule

Which thermometer is generally used in laboratories? a) Clinical thermometer

b) Digital thermometer

c) Laboratory thermometer

d) Mercury barometer

In conduction, heat is transferred by: a) Actual movement of particles

b) Electromagnetic waves

c) Direct contact between particles

d) Reflection of heat

Convection currents are set up because: a) Hot fluids become denser

b) Cold fluids rise upward

c) Hot fluids become lighter and rise

d) Heat travels in straight lines

Heat from the Sun reaches the Earth through: a) Conduction

b) Convection

c) Radiation

d) Expansion

Which of the following is the best conductor of heat? a) Wood

b) Plastic

c) Copper

d) Rubber

During anomalous expansion, water: a) Expands on heating only

b) Contracts continuously on cooling

c) Expands when cooled below 4°C

d) Freezes at 4°C

Water has maximum density at: a) 0°C

b) 4°C

c) 10°C

d) 100°C

Which mode of heat transfer does not require a material medium? a) Conduction

b) Convection

c) Radiation

d) Diffusion

Sea breeze occurs during the day due to: a) Radiation

b) Conduction

c) Convection currents in air

d) Reflection of sunlight

Fill in the Blanks

Heat flows naturally from a _____ temperature region to a _____ temperature region.

The transfer of heat through liquids and gases is called _____.

Dark coloured objects are good absorbers of _____.

In solids, heat is mainly transferred by _____.

The unusual behaviour of water below 4°C is called _____ expansion.

True or False

Radiation can take place through vacuum.

Convection takes place in solids.

Mercury is used in thermometers because it expands uniformly.

Water contracts when cooled from 4°C to 0°C.

Land breeze blows from land towards sea during night.

Assertion–Reason Type

Assertion (A): Woollen clothes keep us warm in winter.

Reason (R): Wool is a poor conductor of heat.

a) Both A and R are true and R is the correct explanation of A

b) Both A and R are true but R is not the correct explanation

c) A is true but R is false

d) A is false but R is true

Assertion (A): Ice floats on water.

Reason (R): Density of ice is less than water.

a) Both A and R are true and R is the correct explanation of A

b) Both A and R are true but R is not the correct explanation

c) A is true but R is false

d) A is false but R is true

Match the Following

Column A

Column B

Conduction

Transfer of heat in solids

Convection

Sea breeze

Radiation

Heat from the Sun 4°C

Maximum density of water

Thermometer

Measures temperature

Very Short Answer Questions

Name the three modes of transfer of heat.

Why are metals used in cooking utensils?

What is anomalous expansion of water?

Which mode of heat transfer occurs in vacuum?

Why does warm air rise upward?

Project- Prepare a model/chart showing the three modes of transfer of heat

Conduction, Convection, Radiation.

**SOCIAL
SCIENCE**

1. Create 50 question answer from ch [1.ch](#) 9 and ch 18
2. Draw a project on Layers of Soil Profile
3. List your fundamental rights and duties.
4. Create a collage on effects of Deforestation.
5. Learn answer of the taught chapters.

Note: All to be done in [S.Sc](#) Homework copy.

SANSKRIT

- ❀ जयतु संस्कृतम् ॥ जयतु भारतम् ॥ ❀ 📖 अवकाशगृहकार्यं 📖 कक्षा : सप्तम्
०१. शब्दरूपाणि
देवः (अकारान्त पुल्लिङ्ग)
लता (आकारान्त स्त्रीलिङ्ग)
साधुः (उकारान्त पुल्लिङ्ग)
 ०२. पठ् तथा भू धातुरूपाणि
(पञ्च लकारेषु)
 ०३. प्रत्ययाः
पाठ्यपुस्तकात् 'क्त्वा' प्रत्ययान् चित्वा लिखन्तु, स्मरन्तु च।
 ०४. त्रिंशत् अव्ययपदानि
चित्वा लिखन्तु, स्मरन्तु च।
 ०५. द्वाविंशत्युपसर्गैः शब्दनिर्माणं कुर्वन्तु।
📝 नोटः 📝
उपर्युक्तानि शब्दरूपाणि तथा धातुरूपाणि वर्णयुक्ते चार्टपत्रे लिखित्वा कण्ठस्थं कुर्वन्तु।
- ❀ संस्कृतं वदतु । संस्कृतं पठतु । संस्कृतं जीवनस्य भूषणम् ॥ ❀